

① Add.

(a) $1 + 4 = \square$

(b) $1 + 4 + 5 = \square$

(c) $3 + 4 + 5 = \square$

② Add.

(a)
$$\begin{array}{r} 2 \\ 1 \\ + 7 \\ \hline \square \end{array}$$

(c)
$$\begin{array}{r} 5 \\ 4 \\ + 5 \\ \hline \square \end{array}$$

(b)
$$\begin{array}{r} 3 \\ 7 \\ + 7 \\ \hline \square \end{array}$$

(d)
$$\begin{array}{r} 8 \\ 1 \\ + 1 \\ \hline \square \end{array}$$

③ There are 6 boys and 5 girls at the playgroup. How many children are there in total?

Number Sentence _____

Answer _____ children

④ Write the total number of dots in the .


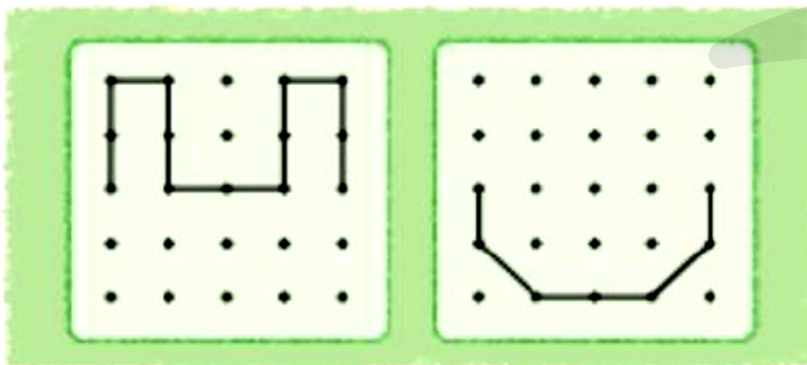
(a)



(b)

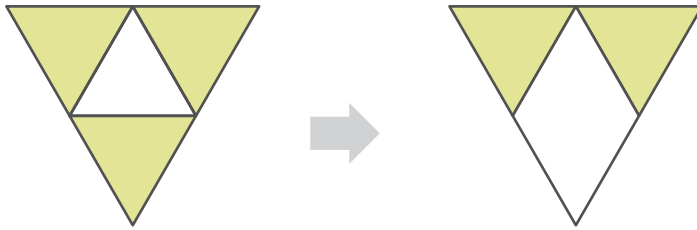


⑤ Combine the top two figures to make a new figure below.

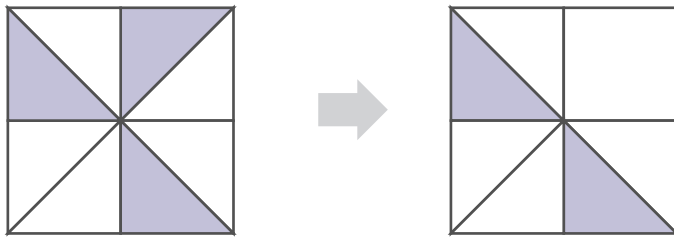


⑥ Complete the figure on the right to make it match the one on the left.

(a)

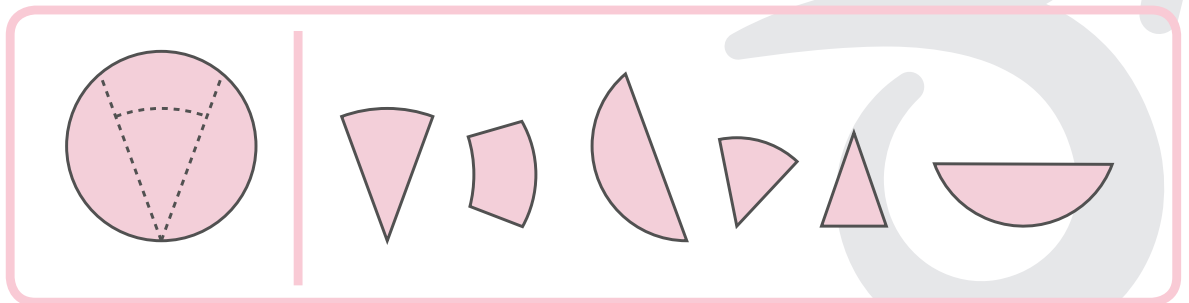


(b)



⑦ Circle the shapes that are made when the dotted lines are cut.

(a)



(b)

