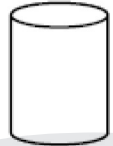
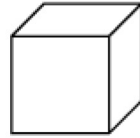


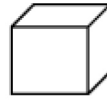
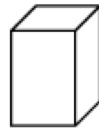
立體圖形

一. 圈出與左方物件相近的立體圖形。

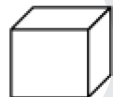
例子



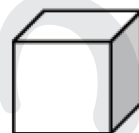
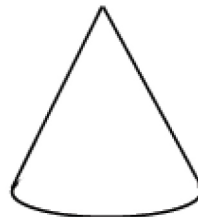

①



②



③



④



二. 圈出正確答案。

① 下列哪個圖案跟  相近？

A.



B.



C.



D.



② 下列哪個圖案跟  相近？

A.



B.



C.



D.



③ 下列哪個圖案跟  相近？

A.



B.



C.

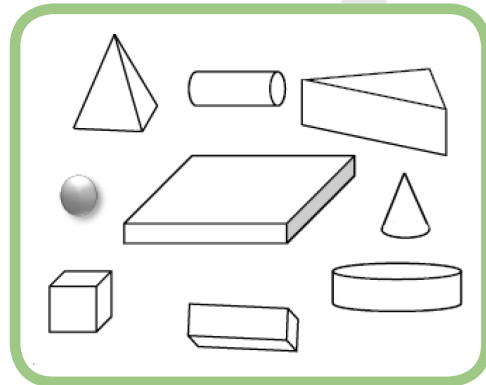
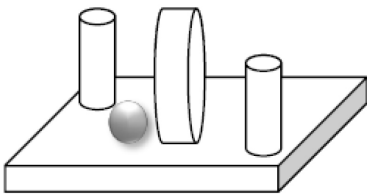


D.



三. 左方的圖案由哪些立體圖形組成呢？把它們圈出來。

①



②

